


Possible Solutions

Look at the animals shown below. Sort the animals into animals that can fly and animals that cannot fly. Complete the sentences and justify your thinking.




There are _____ animals that fly.


There are _____ animals that do not fly.

There are _____ animals.

- **Animals that fly include**



- **Animals that do not fly include**



- There are 4 animals that fly.
- There are 6 animals that do not fly.
- There are 10 animals.